

Gaseste piesa geamana (4-6 ani)

Noteaza toate perechile "gemene" ale
echipei tale

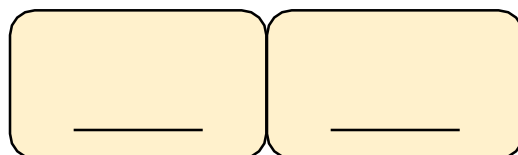
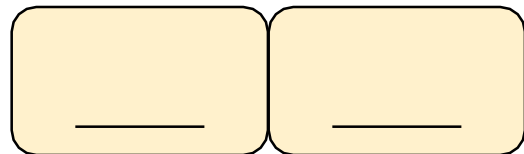
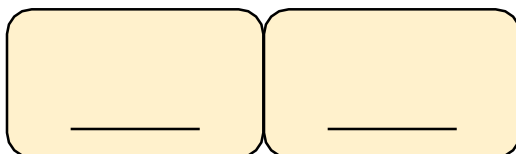
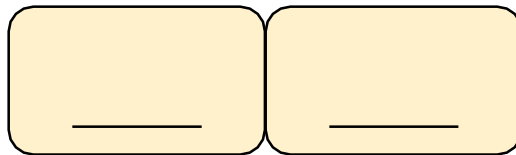
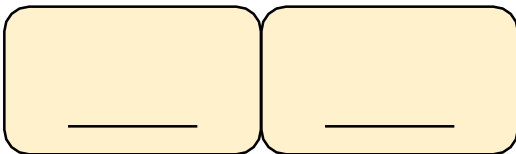
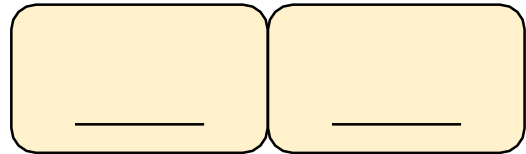
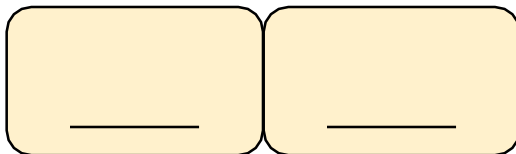
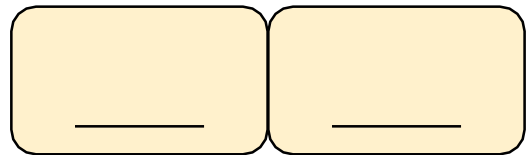
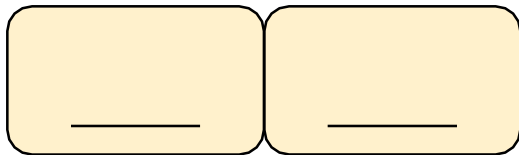
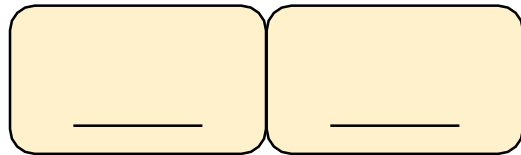
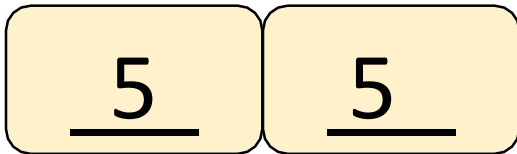
Nume: _____

Nume: _____

Nume: _____

Nume: _____

Clasa: _____



Gaseste Prietenii 10 (100 si 1000) (5-7 ani)

Nume: _____

Nume: _____

Nume: _____

Nume: _____

Clasa: _____

Noteaza toti Prietenii 10 (100 si 1000) ai echipei

<u>7</u>	<u>3</u>
----------	----------

___	___
-----	-----

___	___
-----	-----

___	___
-----	-----

___	___
-----	-----

___	___
-----	-----

<u>20</u>	<u>80</u>
-----------	-----------

___	___
-----	-----

___	___
-----	-----

___	___
-----	-----

___	___
-----	-----

___	___
-----	-----

___	___
-----	-----

___	___
-----	-----

Construim numere (5-7 ani)

Nume: _____

Nume: _____

Nume: _____

Nume: _____

Clasa: _____

Scrie toate numerele echipei tale

Hartie cu numarul:

236

Numarul construit:

2 3 6